


Rhythm & Tempo

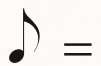
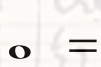
Complete the following measures:



What do these time signatures mean:





How many beats do the following notes get:



What is a metronome? _____

What does "tempo" mean? _____

What does a dot after a note mean? _____

What is the difference between  and ?

What does "rhythm" mean? _____